

Unit #2 Week #3: s Blend Word Families and Examples

	Families and Examples	Tougher Examples
sk-	sky, skin, skip	skill
sn-	snap, snag, snow	snack
sp-	spy, spot, spin	space

Fluency Chart #2

but	just	good	boy	girl
into	little	new	any	off
eat	give	his	how	play
ask	help	old	went	come
that	them	then	what	when

Name: _____

Date: _____

Word Wall Words

eat	give	his	spot	skip
_____	_____	_____	_____	_____
_____	_____	_____	_____	_____
_____	_____	_____	_____	_____

Write a sentence with each of the words above. ADD DETAILS!!

1. _____

2. _____

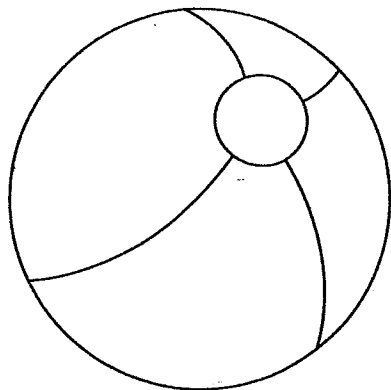
3. _____

4. _____

5. _____

Name _____

Mark's New Toy



Read the story below.

Mark saw a new toy at the store. It was a blue and red ball. Mark told his mom about the ball. His mom said, "We will get it tomorrow." After Mark got the ball, he played with it every day.

Answer the questions. Fill in the circle beside the correct answer, or write the answer on the lines provided.

1. This story is about _____.

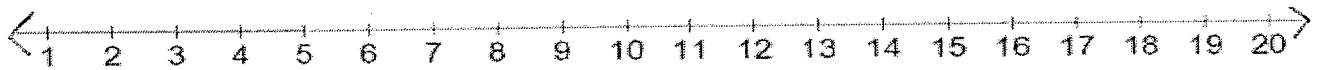
- a new toy
- the toy store
- Mark's sister

2. The ball was blue and _____.

- green
- black
- red

3. What does Mark's mom say about the ball?

Add or subtract. Use the number line below to help you. You do not need to draw pictures for the word problems, unless you choose.



$$\begin{array}{r} 6 \\ +4 \\ \hline \end{array}$$

$$\begin{array}{r} 5 \\ +7 \\ \hline \end{array}$$

$$\begin{array}{r} 9 \\ +0 \\ \hline \end{array}$$

$$\begin{array}{r} 8 \\ +8 \\ \hline \end{array}$$

$$\begin{array}{r} 9 \\ +7 \\ \hline \end{array}$$

$$\begin{array}{r} 4 \\ +4 \\ \hline \end{array}$$

$$\begin{array}{r} 7 \\ +6 \\ \hline \end{array}$$

$$\begin{array}{r} 13 \\ -6 \\ \hline \end{array}$$

$$\begin{array}{r} 12 \\ -4 \\ \hline \end{array}$$

$$\begin{array}{r} 18 \\ -9 \\ \hline \end{array}$$

$$\begin{array}{r} 17 \\ -8 \\ \hline \end{array}$$

$$\begin{array}{r} 6 \\ -0 \\ \hline \end{array}$$

$$\begin{array}{r} 15 \\ -7 \\ \hline \end{array}$$

$$\begin{array}{r} 13 \\ -8 \\ \hline \end{array}$$

1. Jan saw 8 turkeys. Bob saw 9 turkeys. How many turkeys did they see in all?

Number Sentence: _____

2. There were 13 turkeys playing on the playground. 6 of the turkeys went home. How many turkeys are left playing on the playground?

Number Sentence: _____

3. There were 6 Pilgrim boys playing marbles. There were 7 Pilgrim girls playing marbles. How many total Pilgrims were playing marbles?

Number Sentence: _____

4. Tom saw 14 baby turkeys. 8 of the baby turkeys left. How many baby turkeys are there now?

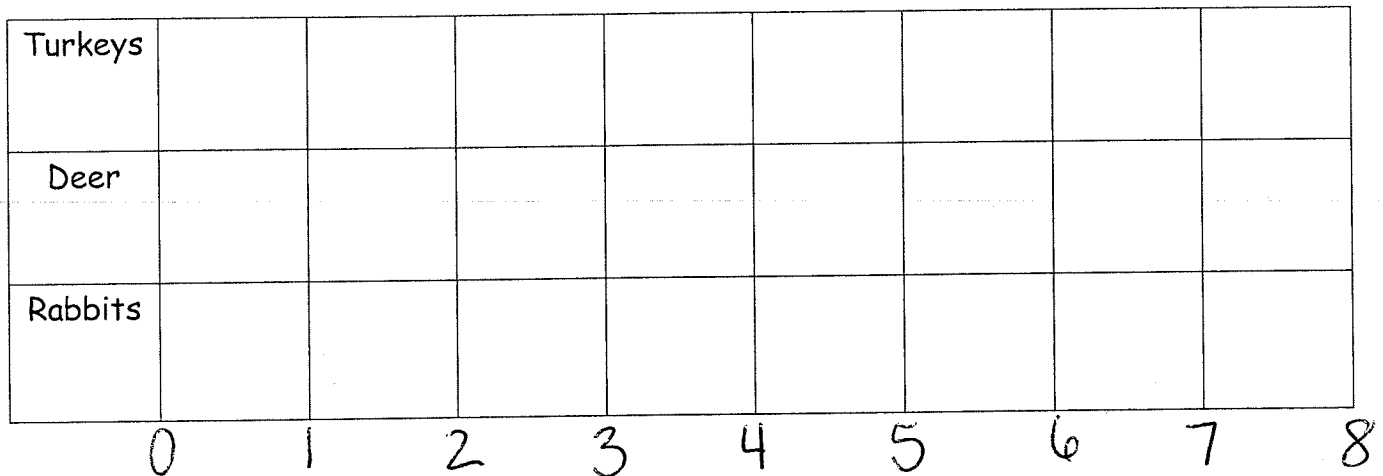
Number Sentence: _____

Name: _____ Date: _____

Directions: Use the information below to fill in the bar graph and answer the questions.

Our Favorite Wild Animals: Turkeys 8 Deer 3 Rabbits 5

Title: Our Favorite Wild Animals



1. How many kids like turkeys? _____
2. How many kids like deer? _____
3. How many kids like deer and rabbits in all? _____
4. How many kids like turkeys and deer in all? _____
5. How many more kids like rabbits than deer? _____
6. Which animal do the least kids like? _____
7. Write and answer your own question about the graph.
